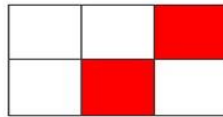



## Πρόσθεση Κλασμάτων (2)



- Κάνε τις προσθέσεις των κλασμάτων με τη βοήθεια των σχημάτων. Το παράδειγμα θα σε βοηθήσει.

1.



$$\frac{3}{6}$$

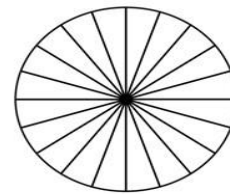
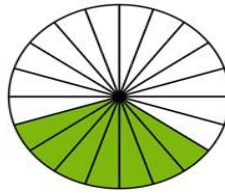
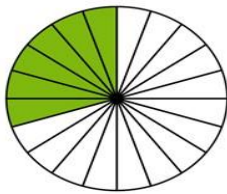
+

$$\frac{2}{6}$$

=

$$\frac{5}{6}$$

2.



$$\frac{6}{20}$$

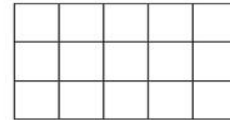
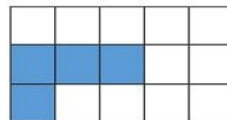
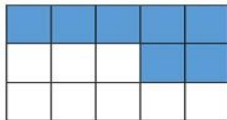
+

$$\frac{7}{20}$$

=

$$-$$

3.



$$\frac{7}{15}$$

+

$$\frac{4}{15}$$

=

$$-$$