


Οι αριθμοί μέχρι το 100

Μέτρησε 10 - 10 μέχρι το 100 και χρωμάτισε.



Θυμήσου και βρες
τον αριθμό!



Ο αριθμός 10 έχει...

1 Δεκάδα και 0 Μονάδες

Δ Μ
10

10

A diagram showing a vertical stack of ten red base ten blocks. To the right, a girl character is shown next to a place value chart with 'Δ' (Tens) and 'Μ' (Units) columns. The number 10 is written in the chart, with '1' in the Tens column and '0' in the Units column. Below the chart is a heart containing the number 10.

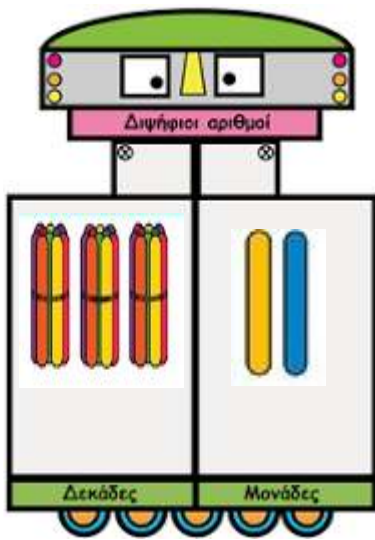
Ο αριθμός 11 έχει...

1 Δεκάδα και 1 Μονάδα

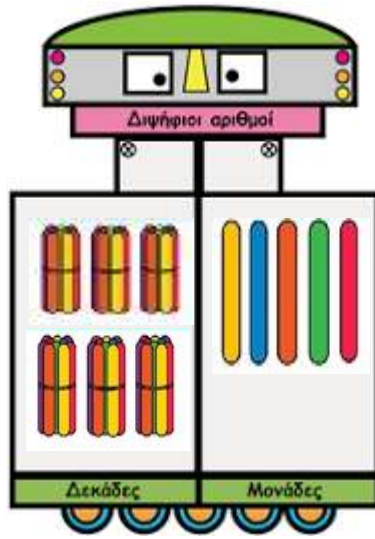
Δ Μ
11

11

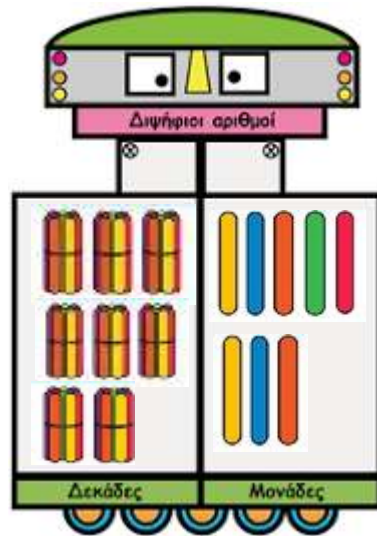
A diagram showing a vertical stack of ten red base ten blocks and one green base ten block. To the right, a boy character is shown next to a place value chart with 'Δ' (Tens) and 'Μ' (Units) columns. The number 11 is written in the chart, with '1' in the Tens column and '1' in the Units column. Below the chart is a heart containing the number 11.



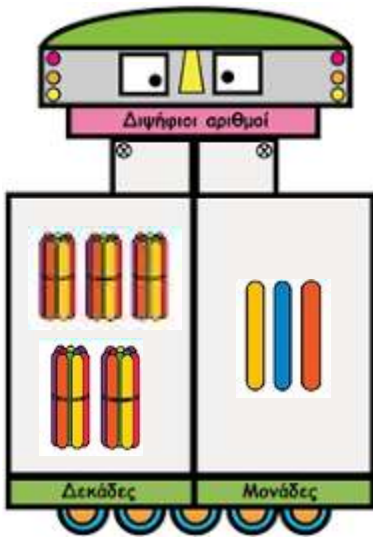
32



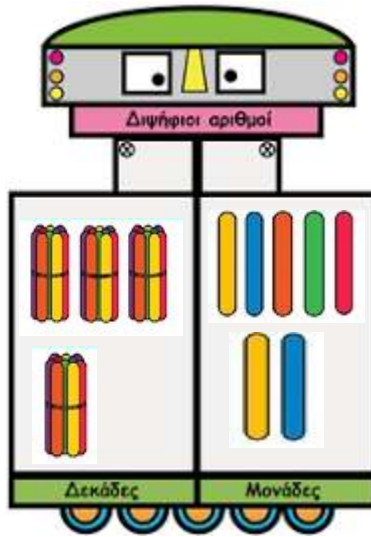
65



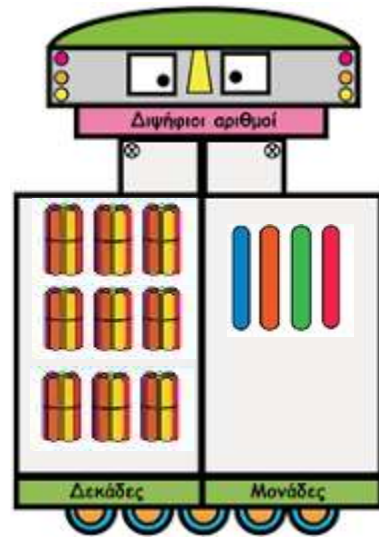
88



53



47



94



Συμπληρώσε τους αριθμούς που γέλιπουν.

1	2	3	4	5	6	7	8	9	10
11	12	13	14	15	16	17	18	19	20
21	22	23	24	25	26	27	28	29	30
31	32	33	34	35	36	37	38	39	40
41	42	43	44	45	46	47	48	49	50
51	52	53	54	55	56	57	58	59	60
61	62	63	64	65	66	67	68	69	70
71	72	73	74	75	76	77	78	79	80
81	82	83	84	85	86	87	88	89	90
91	92	93	94	95	96	97	98	99	100

